
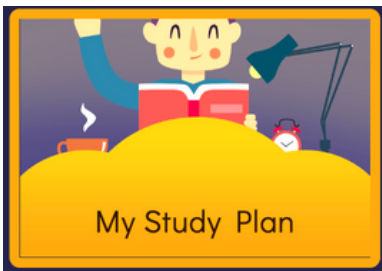


Progress Learning Choice Board

K-1st Grade




Math



My Study Plan



Math



Videos



Math



Skills Practice



Math

Name: _____

10 Less and 10 More

Directions:

- Write the number represented by the model in the middle box.
- Use base 10 blocks to represent a number 10 less than this number and a number 10 more than this number.
- Draw a picture to represent each number.
- Write each number.
- Complete the sentence.

10 Less	Number	10 More
_____		_____

_____ is 10 less than 42 and _____ is 10 more than 42.

Directions: Read each sentence. Trace the dotted words. Look at the models and numbers in problem 1.

- To get 10 less than a number, decrease the tens digit by 1.
- To get 10 more than a number, increase the tens digit by 1.

USA SUPERSHEETS



Assignments



Reading

Name: _____

Adding Details

Directions: Read each sentence. Add a detail by answering the question. Rewrite the sentence with the new detail. See example below.

The girl has a dog.

Add a detail.
What size is the dog? small

Add another detail.
What color is the dog? white

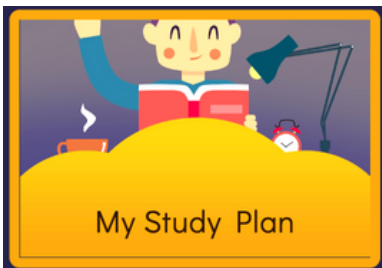
Rewrite the sentence. Include the details from above.

The girl has a small
white dog.

USA SUPERSHEETS




Reading



My Study Plan



Reading



Videos



Reading



Skills Practice